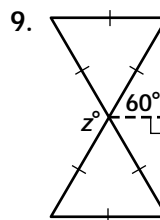
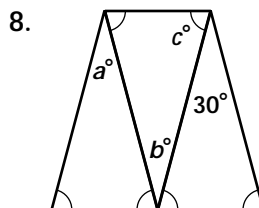
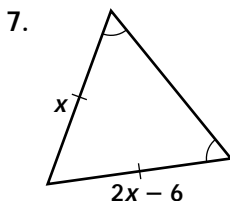
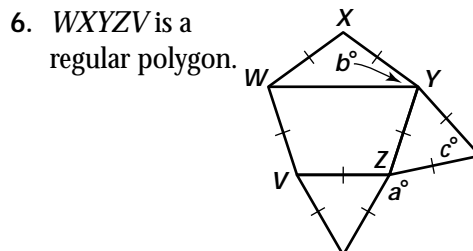
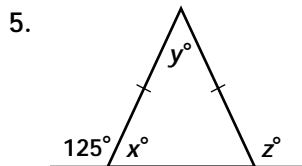
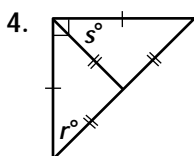
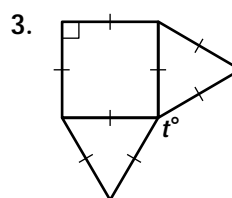
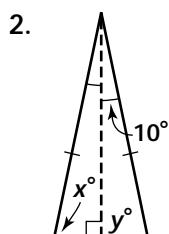
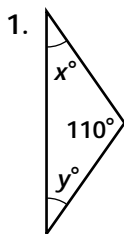


Practice 4-2

Mixed Exercises

Find the values of the variables.



Complete each statement. Explain your answers.

10. $\overline{AF} \cong$ _____

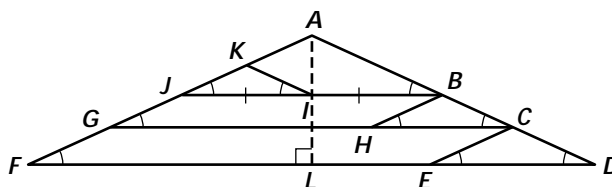
11. $\overline{CA} \cong$ _____

12. $\overline{KI} \cong$ _____

13. $\overline{EC} \cong$ _____

14. $\overline{JA} \cong$ _____

15. $\overline{HB} \cong$ _____



Given $m\angle D = 25$, find the measure of each angle.

16. $\angle JAB$ 17. $\angle FAL$ 18. $\angle JKI$ 19. $\angle DLA$

Find the values of x and y .

