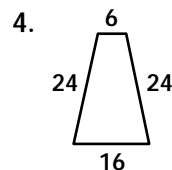
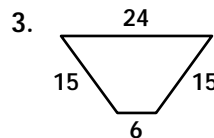
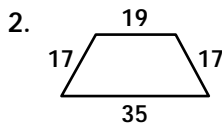
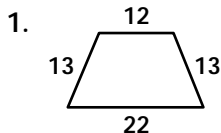


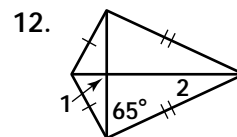
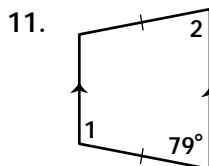
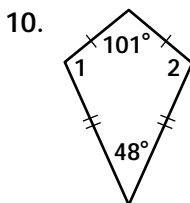
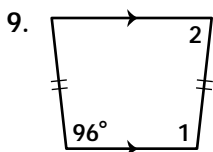
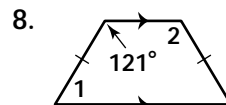
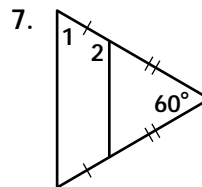
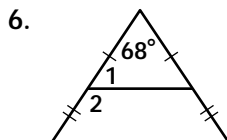
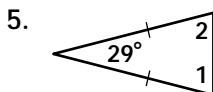
Practice 9-4

Mixed Exercises

Find the height of each isosceles trapezoid.



Find the measures of $\angle 1$ and $\angle 2$.



Find the values of the variables.

13. $DF = 4x$, $EG = 2x + 16$

