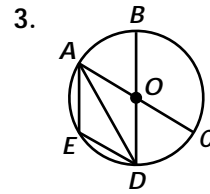
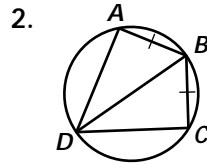
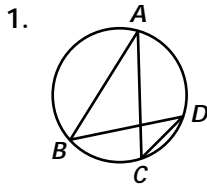


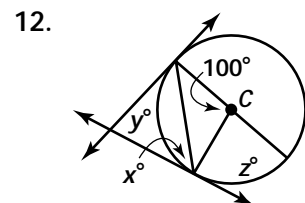
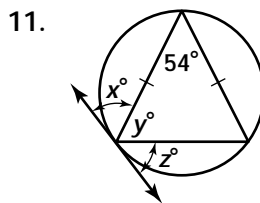
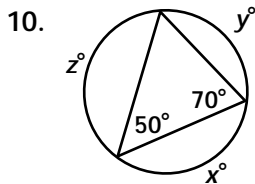
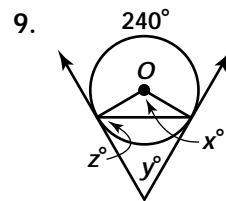
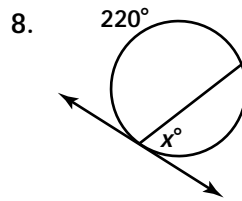
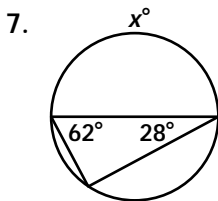
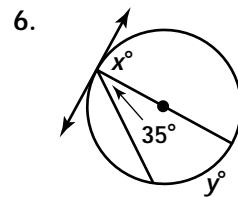
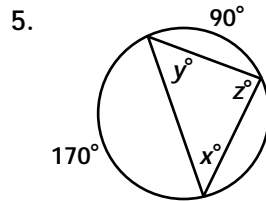
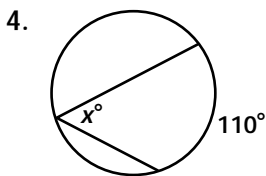
Practice 12-4

Mixed Exercises

For each diagram, indicate a pair of congruent inscribed angles.

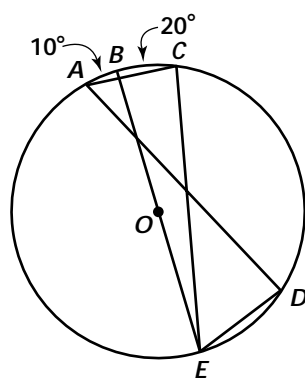


Find the value of each variable.



Find each indicated measure for $\odot O$.

13. a. $m\widehat{AE}$
 b. $m\angle C$
 c. $m\angle BEC$
 d. $m\angle D$



14. a. $m\angle A$
 b. $m\angle B$
 c. $m\angle C$
 d. $m\angle D$

