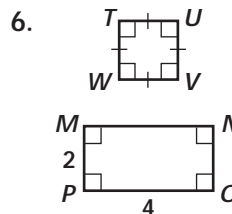
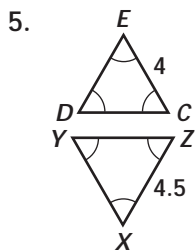
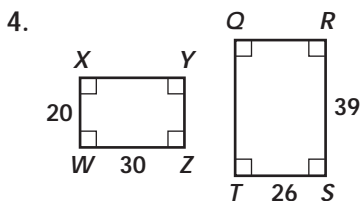
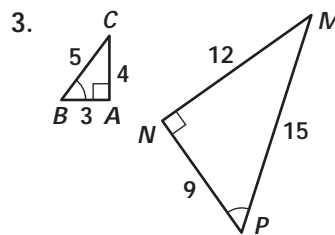
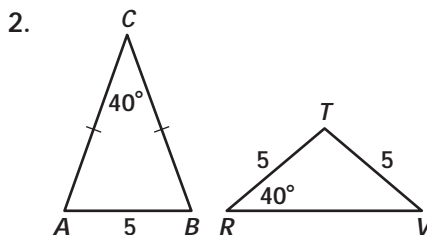
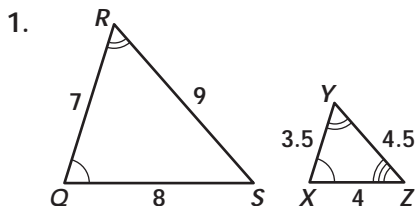


Practice 10-1

Example Exercises

Example 1

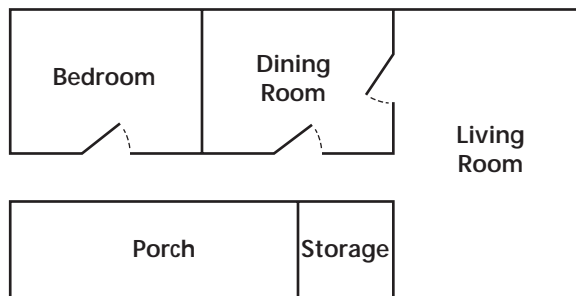
Are the polygons similar? If they are, write a similarity statement and give the similarity ratio. If they are not, explain.



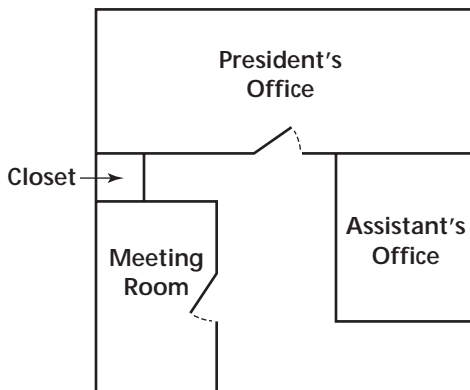
Example 2

Find the actual dimensions of each room.

7. bedroom
8. dining room
9. living room
10. storage
11. porch
12. president's office
13. assistant's office
14. meeting room
15. closet



Scale: 1 in. = 20 ft



Scale: 1 in. = 16 ft