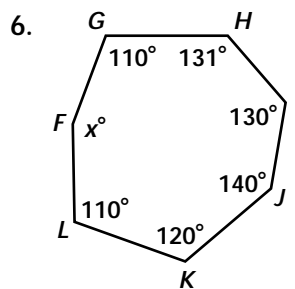
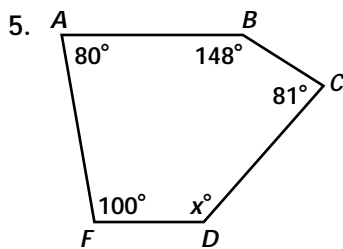
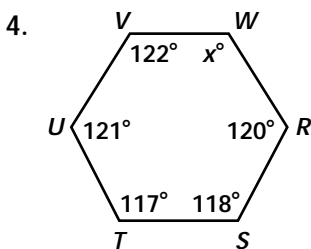
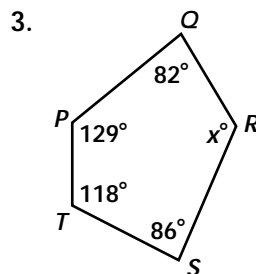
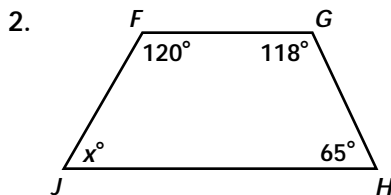
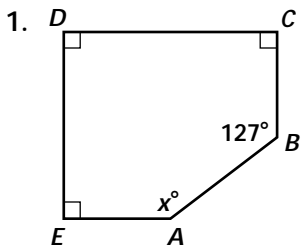


# Practice 2-2

## Example Exercises

### Example 1

Find the value of  $x$  in each polygon.



### Example 2

Find each measure.

- 7. an interior angle in a regular hexagon
- 8. an exterior angle in a regular decagon
- 9. an interior angle in a regular decagon
- 10. an exterior angle in a regular hexagon

### Example 3

Find the measure of each numbered angle.

