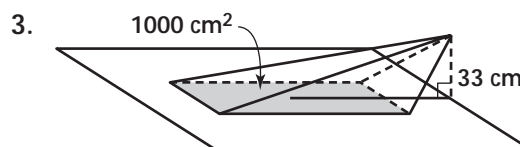
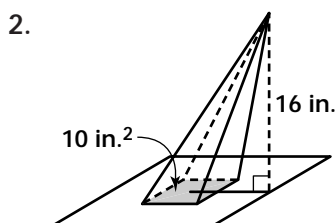
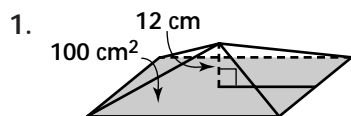


Practice 6-5

Example Exercises

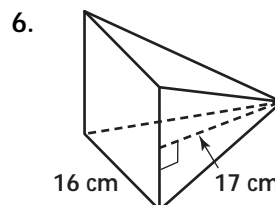
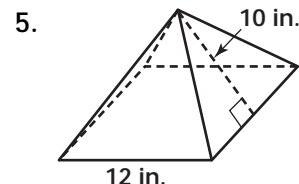
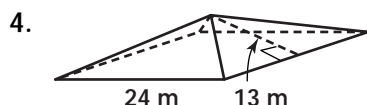
Example 1

Find the volume of each pyramid. Round to the nearest tenth.



Example 2

Find the volume of each regular square pyramid. Round to the nearest tenth.



Example 3

Find the volume of each cone. Round to the nearest tenth.

